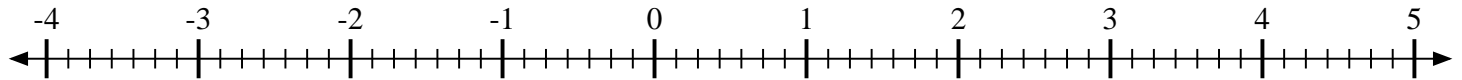
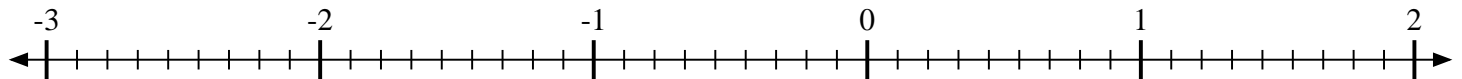


**Mark each location described.**

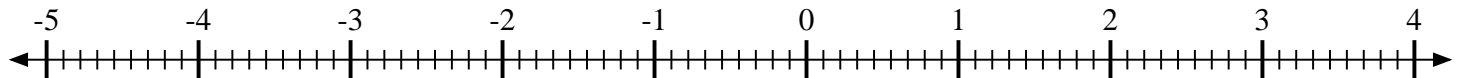
- 1) Mark the location of
- $4\frac{2}{7}$



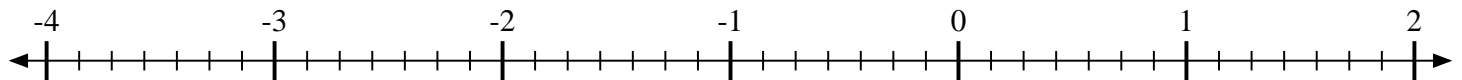
- 2) Mark the location of
- $-1\frac{6}{9}$



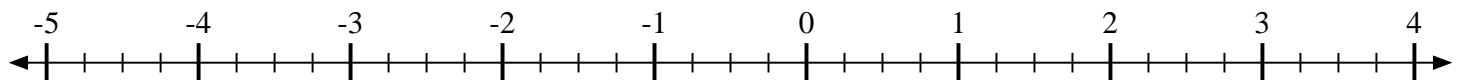
- 3) Mark the location of
- $-1\frac{2}{9}$



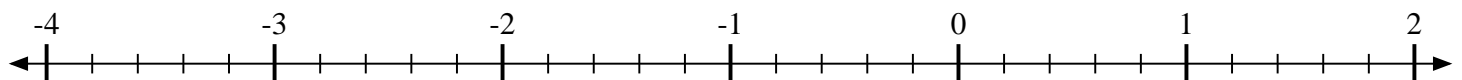
- 4) Mark the location of
- $-1\frac{3}{7}$



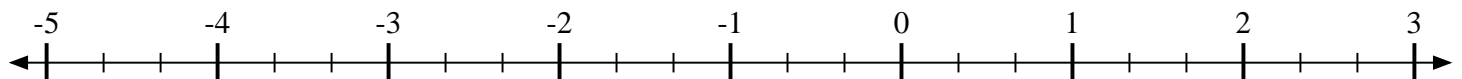
- 5) Mark the location of
- $\frac{1}{4}$



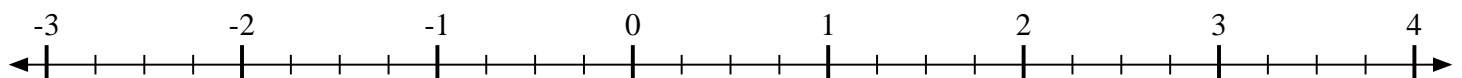
- 6) Mark the location of
- $\frac{4}{5}$



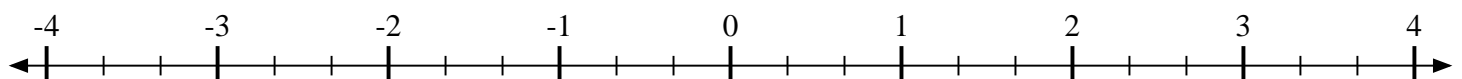
- 7) Mark the location of
- $-3\frac{2}{3}$



- 8) Mark the location of
- $\frac{2}{4}$



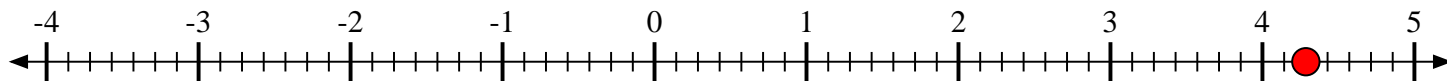
- 9) Mark the location of
- $-2\frac{2}{3}$



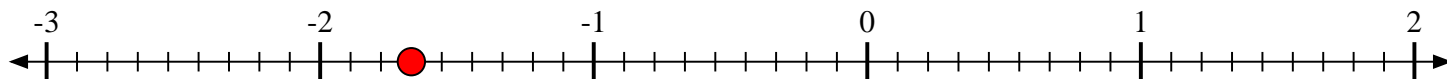


Mark each location described.

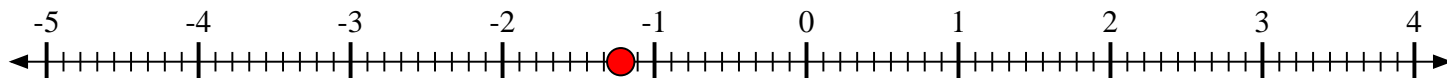
- 1) Mark the location of
- $4\frac{2}{7}$



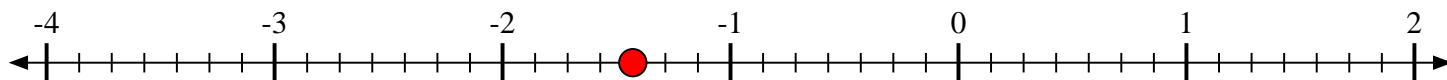
- 2) Mark the location of
- $-1\frac{6}{9}$



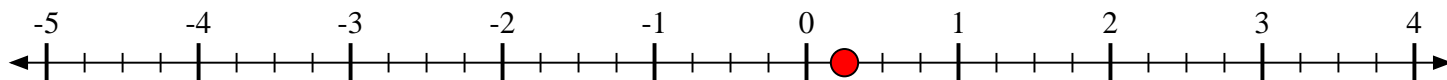
- 3) Mark the location of
- $-1\frac{2}{9}$



- 4) Mark the location of
- $-1\frac{3}{7}$



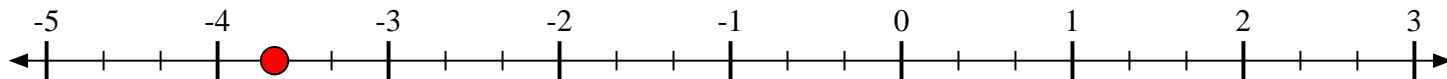
- 5) Mark the location of
- $\frac{1}{4}$



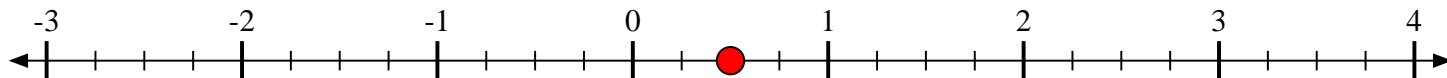
- 6) Mark the location of
- $\frac{4}{5}$



- 7) Mark the location of
- $-3\frac{2}{3}$



- 8) Mark the location of
- $\frac{2}{4}$



- 9) Mark the location of
- $-2\frac{2}{3}$

